

4-2 Degrees and Radians

Write each degree measure in radians as a multiple of π and each radian measure in degrees.

10. 30°

ANSWER:

$$\frac{\pi}{6}$$

11. 225°

ANSWER:

$$\frac{5\pi}{4}$$

12. -165°

ANSWER:

$$-\frac{11\pi}{12}$$

13. -45°

ANSWER:

$$-\frac{\pi}{4}$$

14. $\frac{2\pi}{3}$

ANSWER:

$$120^\circ$$

15. $\frac{5\pi}{2}$

ANSWER:

$$450^\circ$$

16. $-\frac{\pi}{4}$

ANSWER:

$$-45^\circ$$

17. $-\frac{7\pi}{6}$

ANSWER:

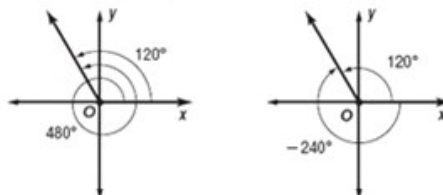
$$-210^\circ$$

Identify all angles that are coterminal with the given angle. Then find and draw one positive and one negative angle coterminal with the given angle.

18. 120°

ANSWER:

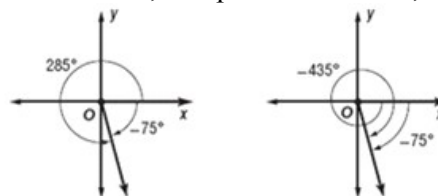
$$120^\circ + 360n^\circ; \text{ Sample answer: } 480^\circ, -240^\circ$$



19. -75°

ANSWER:

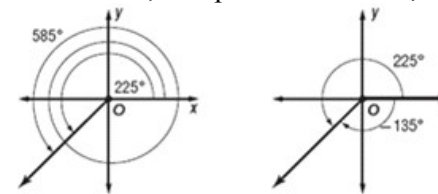
$$-75^\circ + 360n^\circ; \text{ Sample answer: } 285^\circ, -435^\circ$$



20. 225°

ANSWER:

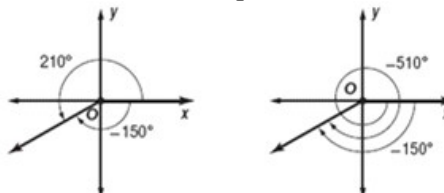
$$225^\circ + 360n^\circ; \text{ Sample answer: } 585^\circ, -135^\circ$$



21. -150°

ANSWER:

$$-150^\circ + 360n^\circ; \text{ Sample answer: } 210^\circ, -510^\circ$$

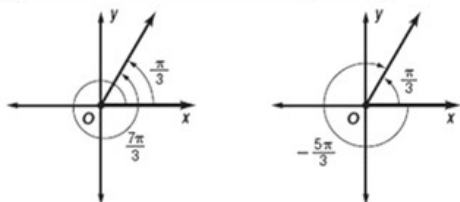


4-2 Degrees and Radians

22. $\frac{\pi}{3}$

ANSWER:

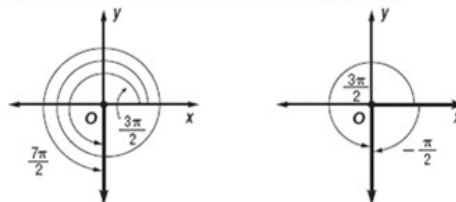
$\frac{\pi}{3} + 2n\pi$; Sample answer: $\frac{7\pi}{3}, -\frac{5\pi}{3}$



25. $\frac{3\pi}{2}$

ANSWER:

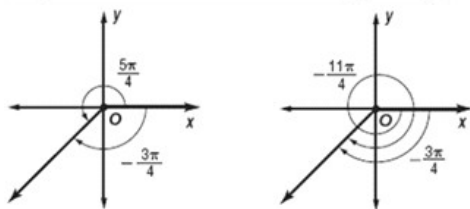
$\frac{3\pi}{2} + 2n\pi$; Sample answer: $\frac{7\pi}{2}, -\frac{\pi}{2}$



23. $-\frac{3\pi}{4}$

ANSWER:

$-\frac{3\pi}{4} + 2n\pi$; Sample answer: $\frac{5\pi}{4}, -\frac{11\pi}{4}$



24. $-\frac{\pi}{12}$

ANSWER:

$-\frac{\pi}{12} + 2n\pi$; Sample answer: $\frac{23\pi}{12}, -\frac{25\pi}{12}$

